

Week Sept 28th – Oct 02nd

2nd class

- This work is simply a menu from you to choose work from. There is no pressure to complete this work. It is simply to provide ideas for you if you have time.
- Find what works best for your family in the current situation. A small amount of quality positive learning is more beneficial than a long period of frustration.
- Exercise and play are equally important for your child's development so try to include these on a daily basis.
- We have focused on English and Maths as we feel it is best to focus on these two key areas.

	Monday	Tuesday	Wednesday	Thursday	Friday
English	Punctuation See page below. A. Punctuate the sentence correctly. B. Tick the sentence with the correct punctuation.	Elephant Facts See page below. A. Write the words in the correct order. B. Ring the word that is not needed in each sentence.	The Wizard's Spell See page below. 1. Write the story. 2. Use the wordbox to help you.	Cats See page below. A. Read the poem. B. Answer the questions.	The Four Seasons See page below. Use the word box at the bottom of the page to help you fill in the blanks.
Maths	Mental Maths Monday Q1-12 See page below. Tables See page below. Add, subtract and colour.	Mental Maths Tuesday Q1-12 See page below. Tens and Units See page below. Complete the worksheet.	Mental Maths Wednesday Q1-12 See page below. Tens and Units See page below. Write the missing numbers.	Mental Maths Thursday Q1-12 See page below. Addition See page below. Add the doubles/near doubles. Write lots of number sentences.	Mental Maths Week 1 Test Q1-15 See page below. Tens and Units See page below. Draw tens and units to show each number.
SESE	All about Italy Read the fact file below. Fill in the template to show what you have learned about Italy.				

PUNCTUATION

MONDAY

A sentence can end with:

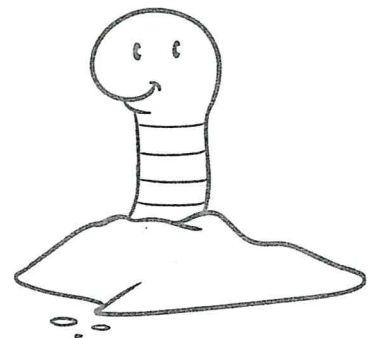
A full stop . Question mark ? Exclamation mark !

A. Punctuate the sentences correctly.

- | | |
|---|---|
| 1. Did you take my pencil <input type="checkbox"/> | 6. I hate spinach <input type="checkbox"/> |
| 2. It is windy outside today <input type="checkbox"/> | 7. Dad has a new bicycle <input type="checkbox"/> |
| 3. Stop screaming <input type="checkbox"/> | 8. Where are you going on |
| 4. Tim is scared of spiders <input type="checkbox"/> | holidays <input type="checkbox"/> |
| 5. Have you seen my shoes <input type="checkbox"/> | |

B. Tick (✓) the sentence with the correct punctuation.

- | | |
|--|--------------------------|
| 1. What is your favourite type of pizza. | <input type="checkbox"/> |
| what is your favourite type of pizza? | <input type="checkbox"/> |
| What is your favourite type of pizza? | <input type="checkbox"/> |
| 2. The monkeys are eating bananas? | <input type="checkbox"/> |
| The monkeys are eating bananas. | <input type="checkbox"/> |
| the monkeys are eating bananas. | <input type="checkbox"/> |
| 3. earthworms live in the ground! | <input type="checkbox"/> |
| Earthworms live in the ground? | <input type="checkbox"/> |
| Earthworms live in the ground. | <input type="checkbox"/> |
| 4. Who broke the glass. | <input type="checkbox"/> |
| who broke the glass? | <input type="checkbox"/> |
| Who broke the glass? | <input type="checkbox"/> |



TUESDAY



Elephant Facts

. Write the words in the correct order.

1. are big Elephants animals. very

2. eat grass and Elephants leaves.

3. has trunk. a An elephant long

4. elephant two tusks. An has

5. Elephants ears. have floppy large,

6. are Male called elephants bulls.

. Ring the word that is not needed in each sentence.

1. A baby elephant is small called a calf.



2. An elephant can lift drink heavy logs with its trunk.

3. Elephants like to roll around in mud to keep cool clean.

4. Elephants can be loud found in Africa and Asia.

5. Elephants are the largest sea land animals in the world

The Wizard's Spell



Think and Talk

How did the wizard get into the classroom? Why is he casting a spell on the teacher? What spell do you think he is casting? What will the teacher do? What will the children do?

Write the story. Use the words in the wordbox to help you.

wizard classroom children puff spell teacher
magic power astonished smoke blackboard


Cats



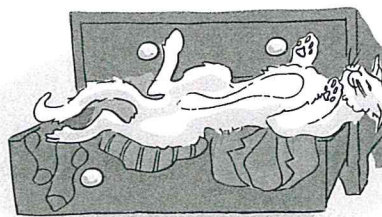

Cats sleep
Anywhere,
Any table,
Any chair,
Top of piano,
Window-ledge,
In the middle,
On the edge,
Open drawer,
Empty shoe,



Anybody's
Lap will do,
Fitted in a
Cardboard box,
In the cupboard
With your frocks –
Anywhere!
They don't care!
Cats sleep
Anywhere.




Eleanor Farjeon



Let's talk!

- Did you like the poem? Why?/Why not?
- Can you name all of the places in the poem where cats like to sleep?
- Can you think of another word for (a) frock and (b) window-ledge?
- Make a list of other places where cats might sleep.
- Do you think that the poet likes cats?
- Do you have a cat? If so, describe your cat to the class.



In every year there are four seasons – Summer, Autumn,
 _____⁽¹⁾ and Spring. Each _____⁽²⁾ is th
 months long. The weather changes in every season.

Summer is the warmest season with _____⁽³⁾ days. We
 spend a lot of time _____⁽⁴⁾ the house in summer.

Autumn is the _____⁽⁵⁾ when many trees begin to
 _____⁽⁶⁾ their leaves while they get ready for the cold
 weather of winter.

Winter is the coldest and wettest season
 of the year. The days are very short and the
 _____⁽⁷⁾ very long.

In Spring the _____⁽⁸⁾ slowly
 becomes warmer. The signs of Spring are the
 green shoots and leaves on plants and the sounds
 of _____⁽⁹⁾ and insects.

After Spring we return to Summer and the
 _____⁽¹⁰⁾ begins all over again.



outside
Winter

long
time

cycle
season

nights
weather


birds
lose

Monday

1. $4 + 3 =$ _____

2. $9 - 4 =$ _____

3. What time is it?
_____ o'clock

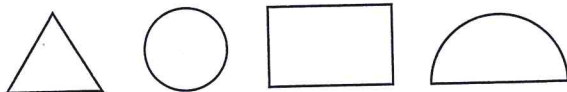


4. Circle the odd number.

5 8 10

5. Write the numeral twenty. _____

6. Colour the semi-circle green.



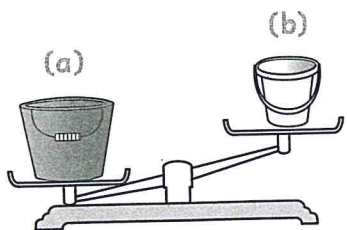
7. 0, 3, 6, _____, 12

8. Which is the 1st month of the year?

☐ January ☐ February ☐ May

9. $6 + 6 =$ _____

10. Which bucket is heavier? _____



11. Jamie had 10c. He bought an apple for 5c. How much change did he get?


12. Jason has 3 cards, Jack has 5 cards and Ellen has 7 cards. How many cards have they altogether?

Tuesday

1. Add 4 to 5.

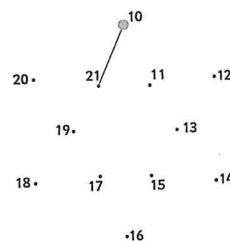
2. $8 - 3 =$

3. Draw a triangle.



4. 4, 7, 10, 13, 16

5. Join the dots.



6. Count the money.



7. What time is it?
o'clock



8. Circle the even number.

3 9 12

9. Write the number shown on the notation board. _____

t	u
●	
:	
●	
●	
	●

$10.7 + 7 =$

Patrick has 5c. John has 7c.
Lisa has 3c.

11. How much money have they altogether? _____

12. If they decided to buy a skipping rope that cost 20c, how much more money would they need?

Wednesday

1. $6 + 3 =$ ____

2. $10 - 3 =$ ____


3. What time is it?
____ o'clock



4. Circle the odd number.


18 11 20

5. Show 28 on the abacus.



6. $8 + 8 =$ ____

7. How many corners
has a
rectangle? ____

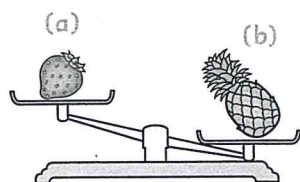


8. $3 + 3 + 3 =$ ____

9. Circle every 3rd number.

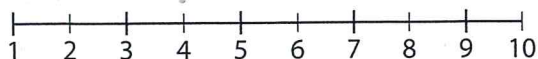
1 2 3 4 5 6 7 8 9

10. Which fruit
is lighter?



11. Jim has 10 marbles. Jane has 4 marbles. How many more marbles has Jim than Jane?

12. Emma started at the number 8. She jumped forward 2 steps and then back 1 step. What number did she end up at?




Thursday

1. Add 4 to 7. ____

2. $9 + 9 =$ ____

3. What time is it?
____ o'clock




4. Circle the even number.

24 21 23

5. Write 18 in words.

6. How many
sides has
a square? ____



7. $4 + 4 + 4 =$ ____

8. Which month comes after February?

☐ January

☐ March

☐ April

9. Take 4 from 8. ____

10. Tick the longer line.



THE SHOP

Lollipop 5c **Ice-cream** 10c

Popcorn 6c **Water** 15c

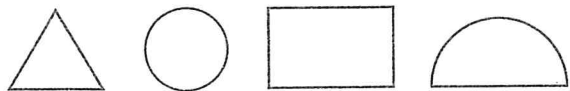
11. How much for a lollipop and a popcorn? ____

12. How much for water
and an ice-cream? ____

1. $7 + 8 =$ _____

2. Take 9 from 14. _____

3. Colour the rectangle green.

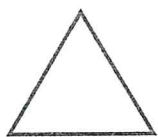


4. What time is it?
_____ o'clock


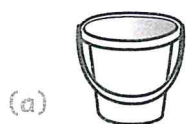


5. $6 + 6 + 6 =$ _____

6. How many corners
has a triangle? _____



7. Which bucket holds more? _____



8. Which is the 5th month
of the year?


☐ June

☐ May

☐ April

9. Write the numeral thirteen. _____

10. Show 46 on the
abacus.



11. Count the money. _____



12. 7, 10, 13, _____, 19

Problems

13. Paul had 5c.

His mammy gave him 10c more.

How much money had he then? _____

14. James got a job cleaning windows.

He cleaned 5 windows on Monday,


8 on Tuesday and 7 on Wednesday.

How many windows did he clean
altogether? _____

15. There were 10 apples in a box.

4 of them were bad.


How many good apples were in the box? _____

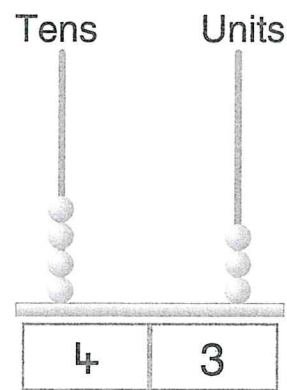
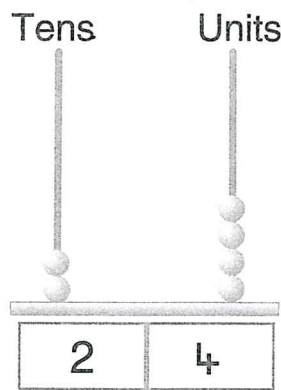
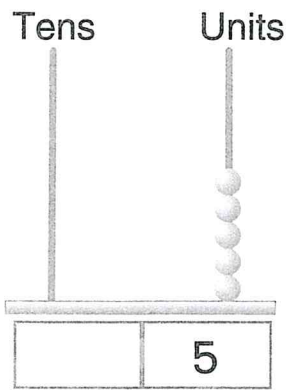


A Add, subtract and colour.

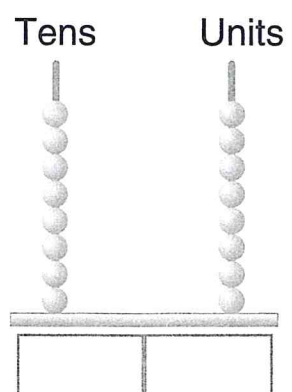
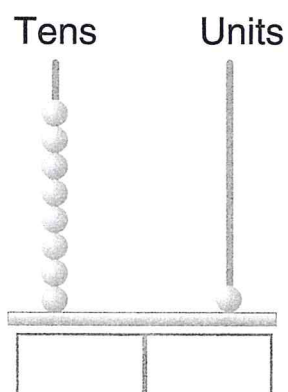
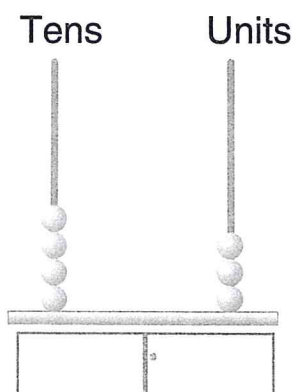
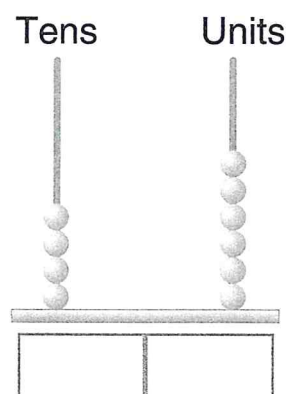
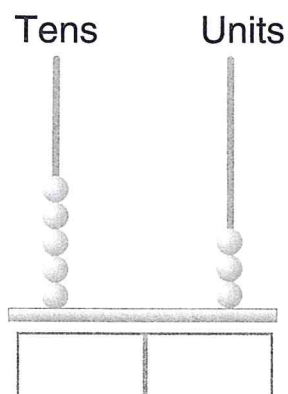
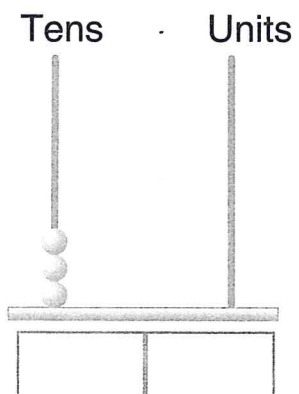
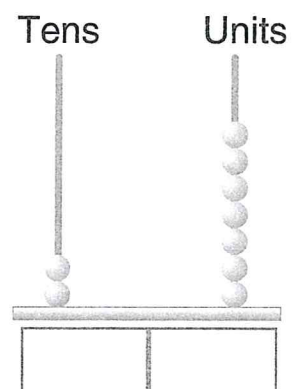
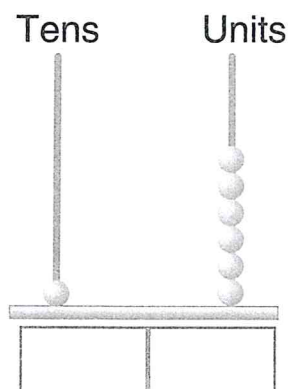
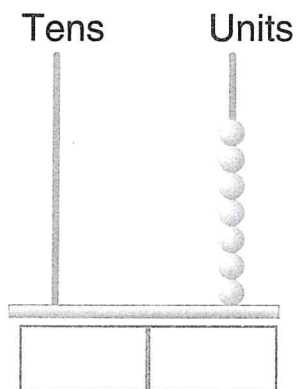
Colour key

11	12	13	14	15	16	17
----	----	----	----	----	----	----







A Fill in the numbers.




A Write the missing numbers.




$$\square \text{ tens} + \square \text{ units} = \square$$




$$\square \text{ tens} + \square \text{ units} = \square$$




$$\square \text{ tens} + \square \text{ unit} = \square$$




$$\square \text{ tens} + \square \text{ units} = \square$$




$$\square \text{ tens} + \square \text{ units} = \square$$




$$\square \text{ tens} + \square \text{ units} = \square$$




$$\square \text{ tens} + \square \text{ units} = \square$$



$$\square \text{ tens} + \square \text{ units} = \square$$



$$\square \text{ tens} + \square \text{ units} = \square$$



$$\square \text{ tens} + \square \text{ unit} = \square$$



Addition

THURSDAY

Add the doubles and near doubles.

A

1. $6 + 6 = \square$

2. $7 + 6 = \square$

3. $5 + 5 = \square$

4. $12 + 12 = \square$

5. $4 + 3 = \square$

6. $6 + 7 = \square$

7. $2 + 3 = \square$

B

1. $2 + 2 = \square$

2. $10 + 11 = \square$

3. $11 + 11 = \square$

4. $14 + 13 = \square$

5. $15 + 15 = \square$

6. $5 + 6 = \square$

7. $7 + 8 = \square$

C

1. $3 + 3 = \square$

2. $8 + 9 = \square$

3. $9 + 9 = \square$

4. $13 + 12 = \square$

5. $16 + 16 = \square$

6. $9 + 10 = \square$

7. $11 + 12 = \square$

B Write as many number sentences as you can from the numbers below.

3	11	10	19	17	12	0
4	5	15	8	1	2	13
14	18	9	16	20	7	6

1. $\square + \square = \square$

2. $\square + \square = \square$

3. $\square + \square + \square = \square$

4. $\square + \square = \square$

5. $\square + \square = \square$

6. $\square + \square + \square = \square$

7. $\square + \square = \square$

8. $\square + \square = \square$

9. $\square + \square + \square = \square$

10. $\square + \square = \square$

11. $\square + \square = \square$

12. $\square + \square + \square = \square$

13. $\square + \square = \square$

14. $\square + \square = \square$

15. $\square + \square + \square = \square$

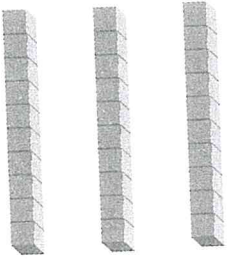
16. $\square + \square = \square$

17. $\square + \square = \square$

18. $\square + \square + \square = \square$



A Draw tens and units blocks for each of these numbers.



38

17

69

56

24

80



Italy

Population: Approximately 60 million (2019)

Capital City: Rome

Language: Italian, although French and German are spoken in the far north by many people.

Continent: Europe

Currency: Euro

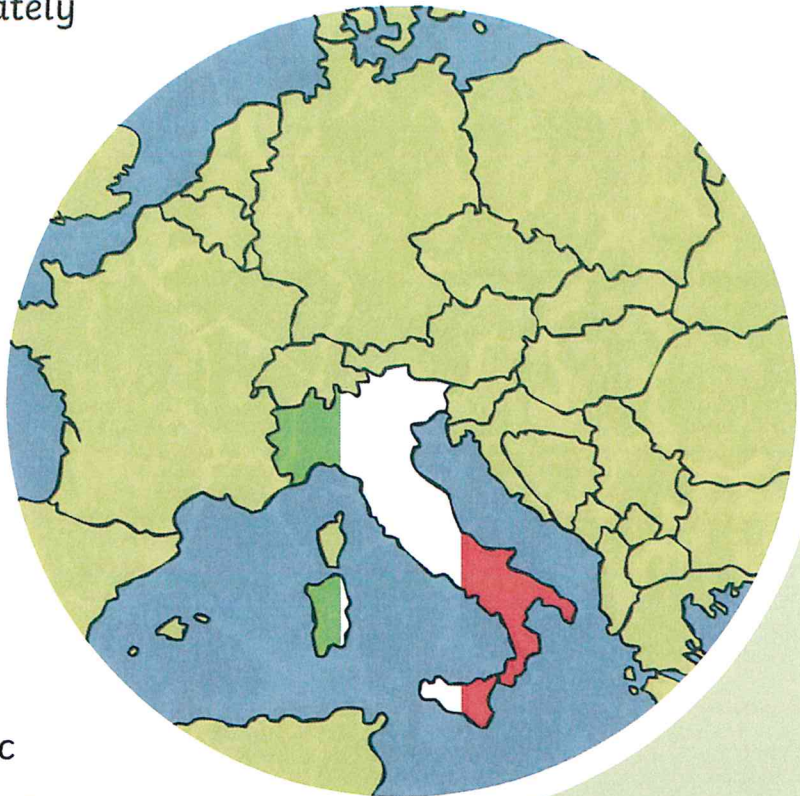

Government:
Unitary constitutional parliamentary Republic

National Day: 2 June 1946

Religion: Mainly Christian

Famous Italians: Giuseppe Mazzini, politician; Michelangelo Bonarroti, painter; Galileo Galilei, scientist; Leonardo Da Vinci, artist and inventor, Rita Levi Montalcini, Nobel Prize in Medicine

Flag:



Climate: Four seasons (spring, summer, autumn and winter).

Conditions on the coastal areas can be very different from the interior's higher ground and valleys, particularly during the winter months when the higher altitudes tend to be cold, wet, and often snowy. The coastal regions have mild winters and warm and generally dry summers, although lowland valleys can be quite hot in summer.

Italy

Use non-fiction books and the Internet to find out information about Italy.

Capital City:


Population:

Language Spoken:

Location of Country:



Country Flag:



Bordering Countries:

Famous Landmarks:

Famous People:

Popular Food:

Popular Activities or Sports:

Traditions:

National Anthem:

Other Interesting Facts: